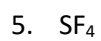
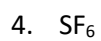
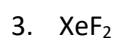
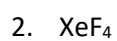
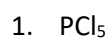


Name _____

Draw the Lewis Dot Structures for the following



6. AlBr_3

7. BF_3

8. BeH_2

9. BrF_5

10. NO_2