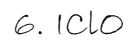
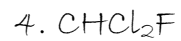
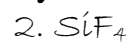


Name _____

Draw the Lewis Dot structures for
Honors Chemistry



7. $C_2I_2F_2$

8. HNO_2

9. HF

10. SiO_2

11. H_2O_2

12. CH_2O