

Day 1

- Raz Kids: listen to reading, read book, and take quiz
- extra math
- Social Studies: Worksheet

Day 2

- Raz Kids: -listen to reading, read book, and take quiz
- extra math
- Science: *Worksheet*

Day 3

- Raz Kids: listen to reading, read book, and take quiz
- extra math
- Writing: *Journal prompt*





Land Regions

Name _____

Physical maps show natural features of the earth such as water, mountains, deserts, and high and low regions. Finish the map as directed.

Physical Map



1. Draw brown  in the mountain and highland regions.
2. Draw orange  on the Pacific Ranges and Lowlands.
3. Color the 5 Great Lakes blue.
4. Draw green  on the Coastal Lowlands.
5. Draw red  in the Western Plateaus, Basins, and Ranges.
6. Color the Interior Plains yellow.
7. Name one city found in the mountains. _____
8. Name one city found in the Coastal Lowlands. _____