

BLIZZARD BAG SCHEDULE:



Please note: The Science Studies Weekly is a hard-copy and has been sent home with your child. If it has been misplaced, you can refer to the copy online.


Day 1 Language Arts Science Social Studies Math	Language Arts/Science: Read the Science Studies Weekly. <u>Answer and complete Science Studies Weekly-Adventure 1-4 questions.</u> Social Studies: Complete <u>"Draw a Map of your Room"</u> Math: Complete <u>Practice Set 53</u>
Day 2 Language Arts Science Social Studies Math	Language Arts/Science: Complete <u>Day 2 Language Arts/Science Page</u> Social Studies: Complete <u>Adventure Land Page</u> Math: Complete <u>Pete's Great Goods Page</u>
Day 3 Language Arts Science Social Studies Math	Language Arts/Science: Complete <u>Day 3 Language Arts/Science Page</u> Social Studies: Complete <u>The Right Direction Page</u> Math: Complete <u>Going Bananas Page</u>



NAME _____

DAY 3 SCIENCE/Language Arts:

In the space below, please draw and label **three non-living Things** in your home.



**Please write a telling sentence about each item. Please include
adjectives/describing words.**


1. _____

2. _____

3. _____

The Right Direction

Study the map.
Answer the questions.



1. What is **west** of the brick house?

2. What is **south** of the orchard?

3. What is **west** of the straw house?

4. What is **north** of the stick house?

5. What is **north** of the straw house?

6. What is **south** of the brick house?

7. What is **east** of the brick house?

8. What is **south** of the park?


Bonus Box: On the back of this paper, write a sentence that tells where the straw house is. Use *north*, *south*, *east*, or *west* in your sentence.

name _____

Addition/subtraction to 18

Going Bananas

Add or subtract.
The answer is **greater**
than 14, color it red.
Color the rest.



15 -6	9 $+7$	2 $+9$	18 -9	5 $+8$	9 $+8$	17 -8
------------	-----------	-----------	------------	-----------	-----------	------------