

BLIZZARD BAG SCHEDULE:



Please note: The Science Studies Weekly is a hard-copy and has been sent home with your child. If it has been misplaced, you can refer to the copy online.


<p>Day 1</p> <p>Language Arts Science Social Studies Math</p>	<p>Language Arts/Science: Read the Science Studies Weekly. <u>Answer and complete Science Studies Weekly-Adventure 1-4 questions.</u></p> <p>Social Studies: Complete <u>"Draw a Map of your Room"</u></p> <p>Math: Complete <u>Practice Set 53</u></p>
<p>Day 2</p> <p>Language Arts Science Social Studies Math</p>	<p>Language Arts/Science: Complete <u>Day 2 Language Arts/Science Page</u></p> <p>Social Studies: Complete <u>Adventure Land Page</u></p> <p>Math: Complete <u>Pete's Great Goods Page</u></p>
<p>Day 3</p> <p>Language Arts Science Social Studies Math</p>	<p>Language Arts/Science: Complete <u>Day 3 Language Arts/Science Page</u></p> <p>Social Studies: Complete <u>The Right Direction Page</u></p> <p>Math: Complete <u>Going Bananas Page</u></p>



NAME _____

DAY 2 SCIENCE/Language Arts:

In the space below, please draw and label **three Living Things** in your home.



Please list three items these living things need in order to survive.

1. _____

2. _____

3. _____

Name _____

Simply "Map-nificent"
Using a map

Adventure Land

ADMIT ONE

Map Key

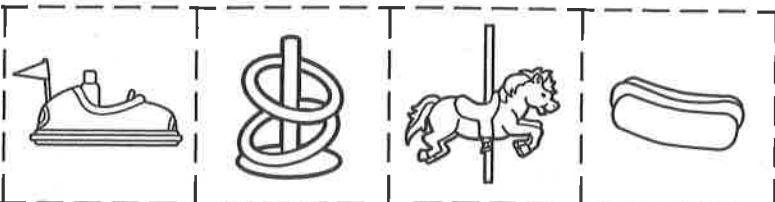
bumper cars merry-go-round ticket booth

games snack shack petting zoo

Cut. Glue.

1. Put the **east** of the ticket booth.
2. Put the **west** of the petting zoo.
3. Put the **north** of the bumper cars.
4. Put the **south** of the snack shack.

©The Mallbox® • TEC42037 • June/July 2008



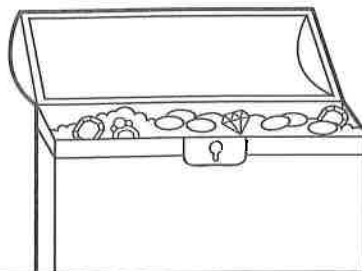
Note to the teacher: Use with "Adventure Land" on page 39.

Pete's Great Goods!

Read.

Circle the matching problem.

Solve.



A. Pete has 6 treasure chests. Then he gets 5 more. How many chests does he have in all?

$$6 + 5 = \quad 6 - 5 =$$

$$\underline{\quad} \bigcirc \underline{\quad} = \underline{\quad} \text{ chests}$$

B. Pete hides 15 necklaces on the deck. Then he moves 9 of them below the deck. How many necklaces are left on the deck?

$$15 + 9 = \quad 15 - 9 =$$

$$\underline{\quad} \bigcirc \underline{\quad} = \underline{\quad} \text{ necklaces}$$

C. Pete sells 7 diamonds at the docks. Then he sells 6 more diamonds. How many diamonds does he sell in all?

$$7 + 6 = \quad 7 - 6 =$$

$$\underline{\quad} \bigcirc \underline{\quad} = \underline{\quad} \text{ diamonds}$$

D. Pete stacks 9 coins. Then he stacks 5 more coins on top. How many coins are in the stack in all?

$$9 + 5 = \quad 9 - 5 =$$

$$\underline{\quad} \bigcirc \underline{\quad} = \underline{\quad} \text{ coins}$$

E. Pete has 18 jewels. He gives 9 jewels to his mother. How many jewels does he have left?

$$18 - 9 = \quad 18 + 9 =$$

$$\underline{\quad} \bigcirc \underline{\quad} = \underline{\quad} \text{ jewels}$$

F. Pete has 12 coins. He gives 4 coins away. How many coins does he have left?

$$12 + 4 = \quad 12 - 4 =$$

$$\underline{\quad} \bigcirc \underline{\quad} = \underline{\quad} \text{ coins}$$

Bonus: Circle the words in each problem that let you know whether you should add or subtract.